

## SHAPES


CIRCLE

RECTANGLE

TRIANGLE
























SQUARE

OVAL



Read and follow the path:

SQUARE - CIRCLE - OVAL - TRIANGLE -  
 - TRIANGLE - CIRCLE - SQUARE - TRIANGLE -  
 - RECTANGLE - SQUARE - CIRCLE

START				
				
				
				
				FINISH

How many triangles can you see?  
 I can see \_\_\_\_\_ triangles.

How many rectangles can you see?  
 I can see \_\_\_\_\_ rectangles.

How many ovals can you see?  
 \_\_\_\_\_ .

How many squares can you see?  
 \_\_\_\_\_ .

How many circles can you see?  
 \_\_\_\_\_ .